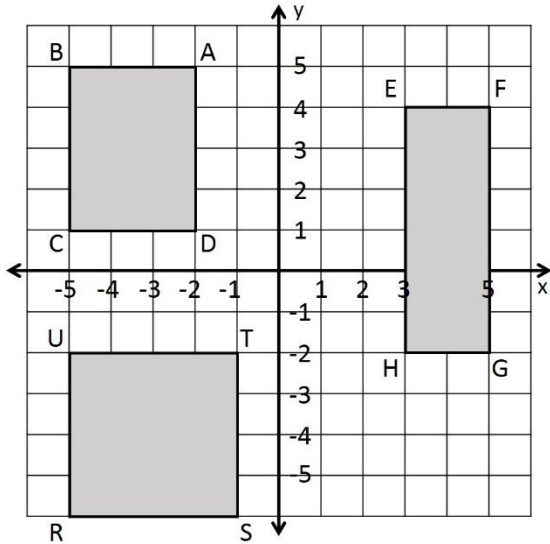


# Coordinate Plane Perimeter and Area - answers

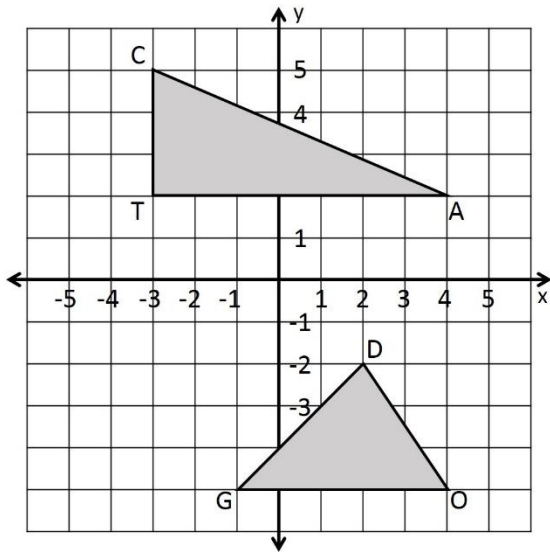


Find the perimeter and area of each rectangle. Round each answer to the nearest hundredth.

ABCD Perimeter = \_\_\_\_\_ Area = \_\_\_\_\_

EFGH Perimeter = \_\_\_\_\_ Area = \_\_\_\_\_

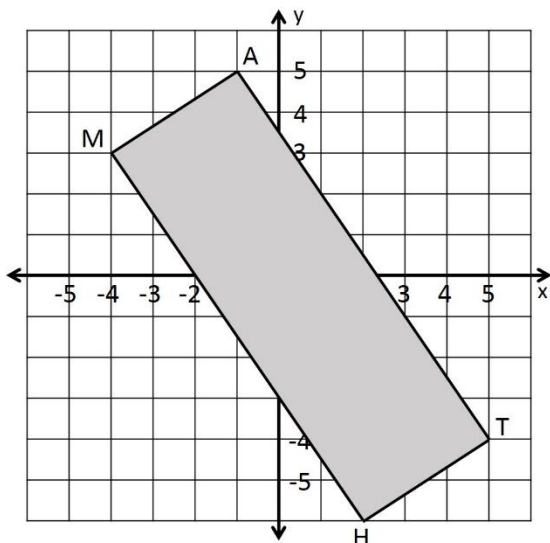
RSTU Perimeter = \_\_\_\_\_ Area = \_\_\_\_\_



Find the perimeter and area of each triangle. Round each answer to the nearest hundredth.

$\triangle CAT$  Perimeter = \_\_\_\_\_ Area = \_\_\_\_\_

$\triangle DOG$  Perimeter = \_\_\_\_\_ Area = \_\_\_\_\_



Find the perimeter and area of rectangle MATH. Round each answer to the nearest hundredth.

Perimeter = \_\_\_\_\_ Area = \_\_\_\_\_